
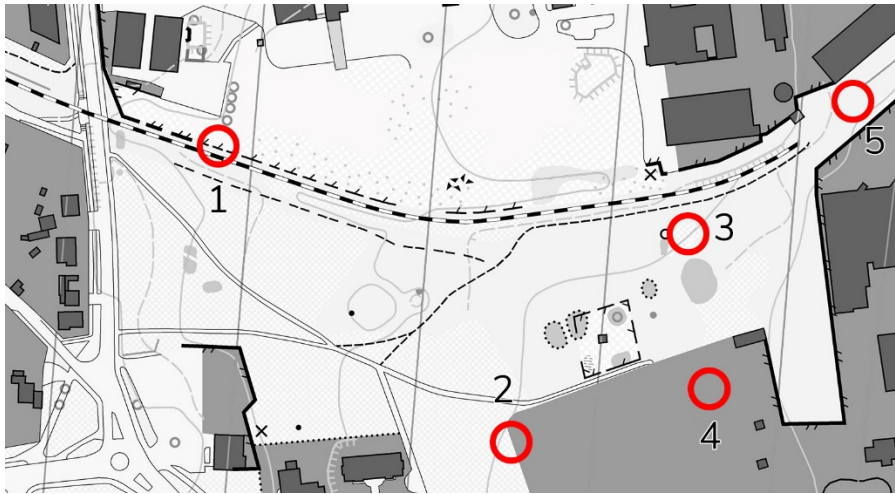


Answer sheet

Check whether you've found all ten differences between the two maps.

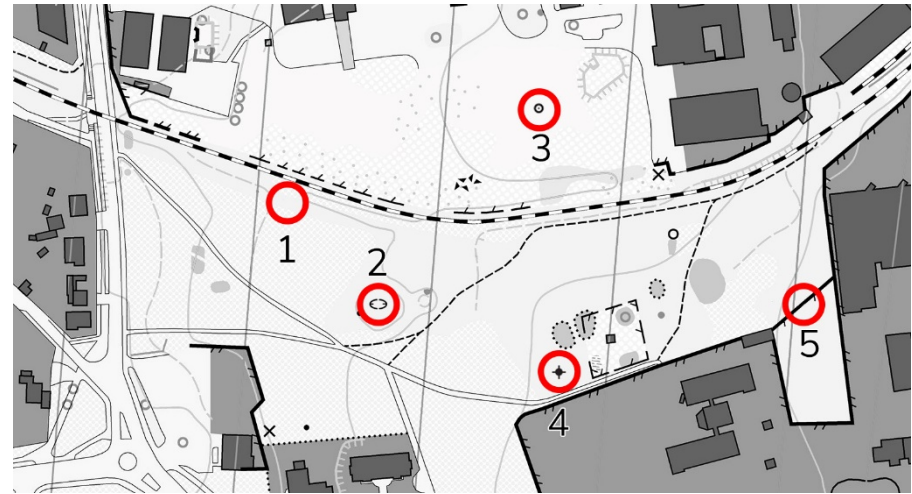


Map 1



- | | | |
|---|--|----------------|
| 1 | | Fence |
| 2 | | High fence |
| 3 | | Minor footpath |
| 4 | | Building |
| 5 | | Railway |

Map 2



- | | | |
|---|--|------------------------|
| 1 | | Less distinct footpath |
| 2 | | Large pit |
| 3 | | Cairn |
| 4 | | Pylon |
| 5 | | High fence |