













# Orienteering spot the difference

There are ten differences between the two maps. Can you find them all?















## Map 1

-  Retaining wall, earth bank
-  Pit, depression:  
large and small
-  Roads:  
major, minor
-  Rough road
-  Vehicle track
-  Footpaths:  
major, minor
-  Less distinct footpath
-  Railway
-  Fence, crossing point
-  High fence, hedge
-  Building, pylon
-  Man-made object, cairn



## Map 2

-  Retaining wall, earth bank
-  Pit, depression:  
large and small
-  Roads:  
major, minor
-  Rough road
-  Vehicle track
-  Footpaths:  
major, minor
-  Less distinct footpath
-  Railway
-  Fence, crossing point
-  High fence, hedge
-  Building, pylon
-  Man-made object, cairn

